





$$2 + 5 = \underline{\quad}$$



$$3 + 7 = \underline{\quad}$$


$$4 + 6 = \underline{\quad}$$


$$8 + 1 = \underline{\quad}$$


$$9 + 0 = \underline{\quad}$$


$$10 + 2 = \underline{\quad}$$


$$11 + 12 = \underline{\quad}$$